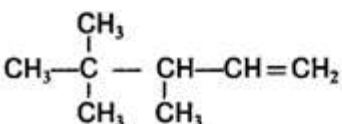
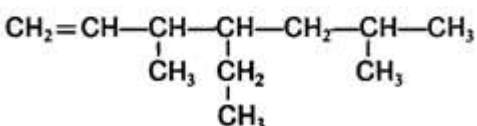
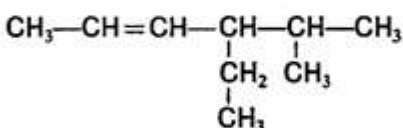
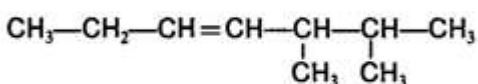
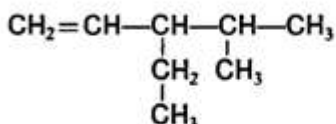
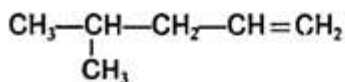
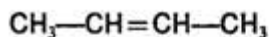




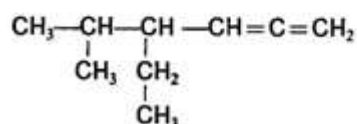
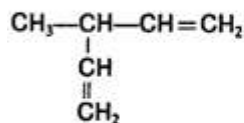
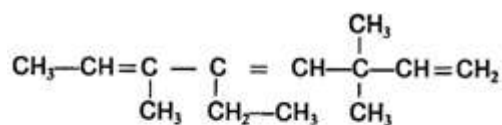
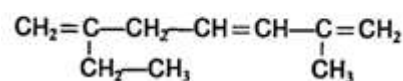
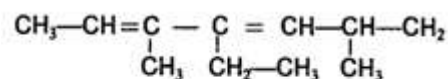
4. Nombra los siguientes compuestos:



5. Formula:

- 3,5-dimetil-2-hexeno
- 2,3-dimetil-2-buteno
- 2,4-dimetil-3-hexeno
- 3,4,4-trimetil-1-penteno

6. Nombra:



7. Nombra los siguientes compuestos:

